

PHYSICS 7A, Lecture 1 - Spring 2019
Midterm 2, C. Bordel
Monday, Apr. 1st, 7-9 pm

• Student name:

• Student ID #:

• Discussion section #:

• Name of your GSI:

• Day/time of your DS:

Physics Instructions

All objects in translational motion can be considered as point masses. You may assume that air resistance is negligible (unless specified otherwise) and that the acceleration due to gravity has constant magnitude g close to the surface of the Earth.

Remember that you need to show your work and justify your answers in order to get full credit!

Math Information Sheet

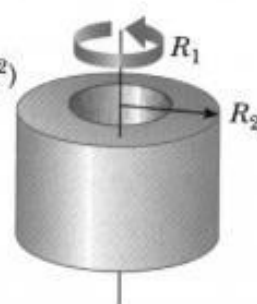
- Solutions to equation $ax^2 + bx + c = 0$ are: $x = \frac{-b \pm \sqrt{b^2 - 4ac}}{2a}$
- $\sin 90^\circ = \cos 0^\circ = -\cos 180^\circ = 1$
- $\sin 0^\circ = \cos 90^\circ = \sin 180^\circ = 0$
- $\sin 45^\circ = \cos 45^\circ = \sqrt{2}/2$
- $\cos (180^\circ - \theta) = -\cos \theta$
- $\sin (180^\circ - \theta) = \sin \theta$
- $\cos (90^\circ + \theta) = -\cos (90^\circ - \theta) = -\sin \theta$
- $\sin (90^\circ + \theta) = \sin (90^\circ - \theta) = \cos \theta$
- $\cos^2 \theta + \sin^2 \theta = 1$
- Circumference of circle: $2\pi R$
- Area of disk: πR^2
- Surface area of sphere: $4\pi R^2$
- Volume of sphere: $4\pi R^3/3$
- Volume of cylinder: $\pi R^2 H$
- Lateral area of cylinder: $2\pi R H$
- Arc length: $s = R\theta$
- Volume of cylindrical shell: $2\pi R H dr$
- $(1+x)^a \sim 1+ax$ if $x \ll 1$
- $\int \frac{dx}{x} = \ln(x) + C$
- $\int x^n dx = \frac{x^{n+1}}{n+1} + C$

Rotational inertias

Hoop or
cylindrical shell
 $I_c = MR^2$



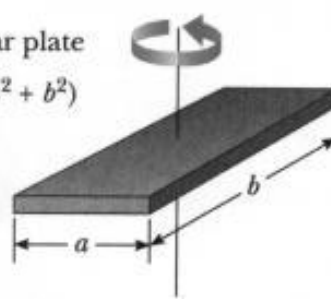
Hollow cylinder
 $I_c = \frac{1}{2} M(R_1^2 + R_2^2)$



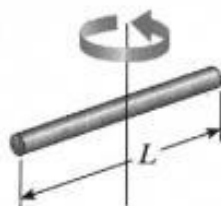
Solid cylinder
or disk
 $I_c = \frac{1}{2} MR^2$



Rectangular plate
 $I_c = \frac{1}{12} M(a^2 + b^2)$



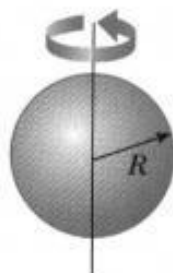
Long thin rod
 $I_c = \frac{1}{12} ML^2$



Long thin rod
 $I = \frac{1}{3} ML^2$



Solid sphere
 $I_c = \frac{2}{5} MR^2$



Thin spherical
shell
 $I_c = \frac{2}{3} MR^2$



Name:

Problem 1 - Sliding block hitting a spring (25 pts)

A block of mass m is released from rest at the top of an incline forming an angle θ with the horizontal. After traveling a distance L , the block hits a spring of stiffness constant k which is initially in its equilibrium configuration. The surface of the incline is rough above the spring - with a coefficient of kinetic friction μ_k between the block and the ramp - but **smooth under the spring** (Fig.1).

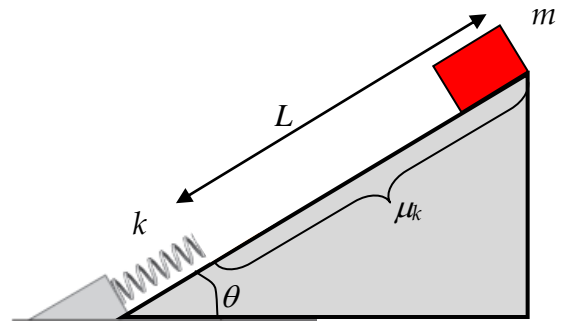


Figure 1

- a. Without any calculation, explain whether or not the block reaches the top of the incline after being pushed by the spring.

- b. Determine the speed of the block when it reaches the spring.

Name:

c. Determine the length of the compression ℓ

d. Determine the distance d traveled by the block on the way back, from the point where it loses contact with the spring to where it reaches its maximum height.

Name:

- e. Determine the kinetic friction coefficient that allows the block to get to a stop after traveling a distance $L/2$ on the way back.

Problem 2 - L2 Lagrange point (25 pts)

Lagrange showed that five special points exist in the vicinity of the Earth (mass M_E). They are such that a small satellite of mass m can orbit the Sun (mass M_S) with the same period T as the Earth's. The 2nd Lagrange point, L_2 , lies on the same radius as the Earth with respect to the center of the Sun, but a small distance d further away from the Sun, as shown in Fig.2. Note that all the other Lagrange points can be ignored in this problem. The distance between the center of the Sun and the center of the Earth is R , and you may assume that $d \ll R$.

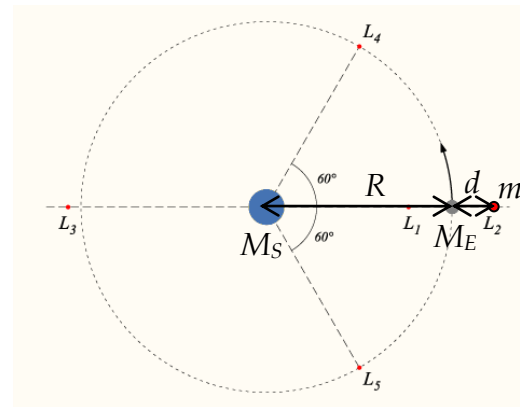


Figure 2

- a. Explain why the satellite, located at a different radial distance from the Sun as compared to the Earth, can have the same time period as the Earth's.

Name:

b. Determine the magnitude of the gravitational fields \vec{g}_E and \vec{g}_m acting on the Earth and satellite, respectively.

c. Establish the two equations satisfied by the time period T for the satellite and the Earth. *Hint: write down the equations of the motion, with the acceleration expressed in terms of the time period T .*

Name:

- d. Using a binomial expansion (*see front page*), write a first order approximation of the equation satisfied by the time period T for the satellite.

- e. Determine the distance d .

Problem 3 – Sinking the 9 ball (25 pts)

Both the cue ball (white) and the 9-ball (striped) have identical mass m (Fig. 3). The pool player hits the cue ball in such a way that its initial velocity points along the x -axis and it collides off-center with the 9-ball, initially at rest. After the collision, both balls move away from each other but the 9-ball is equipped with a device that allows its speed (v_9) and direction (ϕ) to be measured. You may ignore the rotational motion of the balls and any frictional force, and assume that the balls are ideally hard.

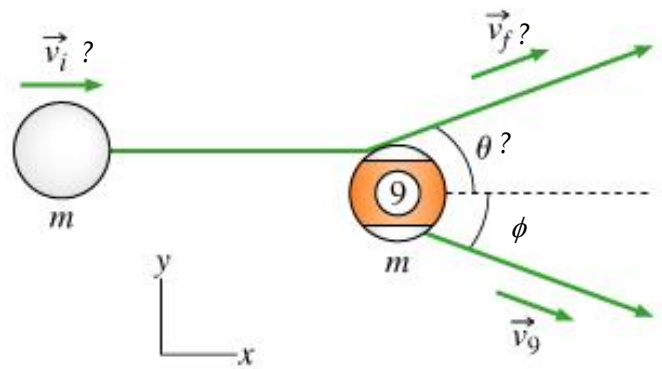


Figure 3

- a. Which conservation law(s) are satisfied during the collision and why?
- b. Determine the angle θ between the direction of the cue ball and the x -axis after the collision.

Name:

c. Determine the initial speed v_i of the cue ball.

d. Determine the final speed v_f of the cue ball.

- e. Determine v_i and v_f if, instead, the cue ball had hit the 9-ball head-on.

Problem 4 - Rolling cylinder (25 pts)

A solid cylinder of radius d and mass M has non-uniform mass distribution $\rho(r)=kr$, where k is a positive constant and r an arbitrary radial distance measured from the symmetry axis of the cylinder. The cylinder is released from rest at the top of an incline making an angle θ with the horizontal. The cylinder's elevation drops by h from the top to the bottom of the incline. The coefficients of static and kinetic friction between the cylinder and the incline are μ_s and μ_k respectively. You may assume that the cylinder is rolling without slipping, and that its symmetry axis remains perpendicular to the edges

of the incline. Note that d is not negligible compared to h and R .

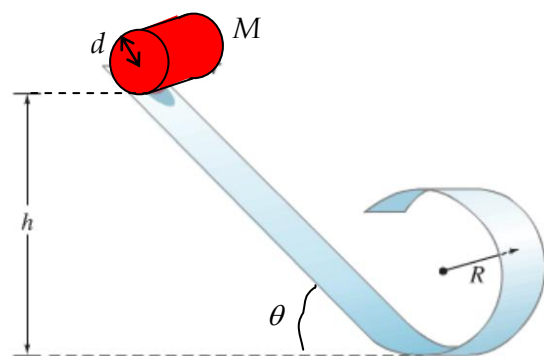


Figure 4

- a. Show that the rotational inertia of the cylinder with respect to its symmetry axis is $I = \frac{3Md^2}{5}$. Hint: assume an arbitrary length for the cylinder and calculate M as well so that you can express I strictly in terms of M and d .

Name:

b. Determine the acceleration of the center of mass of the cylinder.

c. Determine the maximum angle θ that allows the cylinder to avoid slipping.

Name:

d. Determine the total kinetic energy of the cylinder at the top of the loop.

e. Determine the minimum height h that allows the cylinder to make it through the loop.