

# CHEMISTRY 12A FALL 2017

## EXAM 1

SEPTEMBER 26, 2017

*Answer  
Key*

NAME- WRITE BIG \_\_\_\_\_

STUDENT ID: \_\_\_\_\_

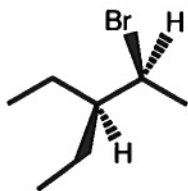
SECTION AND/OR GSI IF YOU ARE IN THE LABORATORY COURSE: \_\_\_\_\_

- You will have 75 minutes in which to work.
- BE NEAT! Non-legible structure drawings will not be graded.
- Only answers in the answer boxes will be graded – you can write in other places, but we only grade the answers in the boxes.
- All pages of the exam must be turned in.
- No calculators
- No stencils
- Molecular models may be used

Problem	Points (Maximum)
1	8
2	10
3	20
4	11
5	12
6	22
7	11
8	12
9	14
<i>Total</i>	<i>120</i>

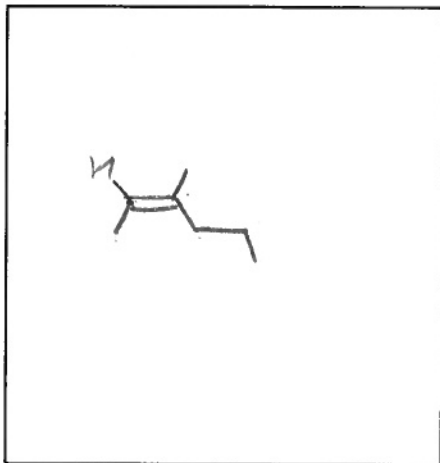
1. (8 points) Fill in either the name or the line drawing of the following molecules:

a.



(S) - 2-bromo-3-ethylpentane

b. (Z)-3-methyl-2-hexene




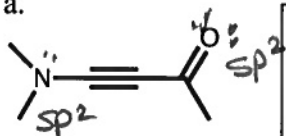
2. (10 points) For each of the following molecules:

i) Draw in all lone pairs

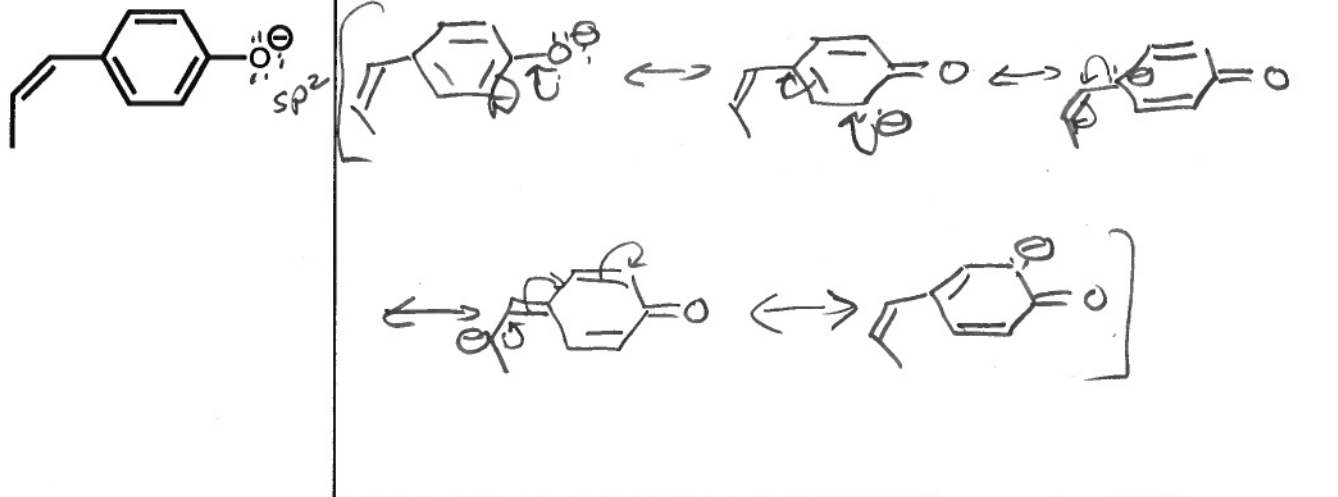
ii) Identify the hybridization of each oxygen and nitrogen atom.

iii) Draw reasonable resonance structures. The atoms in all resonance structures should have full octets.

a.

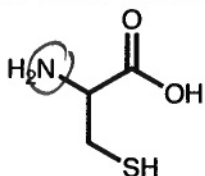


b.



3. (20 points) Circle the indicated atoms in the molecules below. Explain your choice in the box. Include any relevant structures in your explanation.

a. Circle the most basic atom.

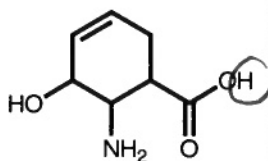


**Explanation**

Nitrogen is more basic than O because it is to the left in periodic table. Therefore, it is less electronegative & the lone pair is less stable

Sulfur is less basic than O & N because it is farther down a column in periodic table & it is bigger, which stabilizes lone pair.


b. Circle most acidic H.



**Explanation**

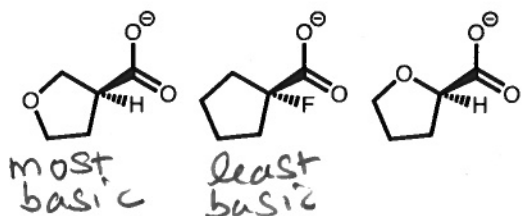
OH more acidic than NH because conjugate base more stable w/  $\ominus$  because O is more electronegative than N.

The circled O-H is more acidic because conjugate base stabilized by resonance w/ charge spread over two oxygens.



The conjugate base of the other O-H is not stabilized by resonance.

c. What is the order of **basicity** of the following compounds?



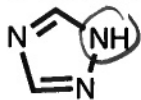
**Explanation**

Fluorine is more electronegative than oxygen & is therefore more electron withdrawing by induction.

Fluorine stabilizes the base by withdrawing electrons from  $\ominus$  & therefore this molecule is less basic.


Oxygen is farther away from the base in the most basic molecule. Therefore, it will be less able to withdraw  $e^-$  density so the base will be less stable & more basic.

d. Circle the **LEAST** basic nitrogen

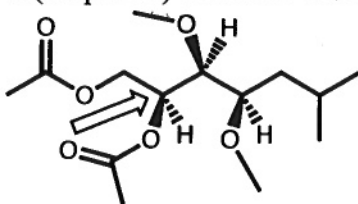


**Explanation**

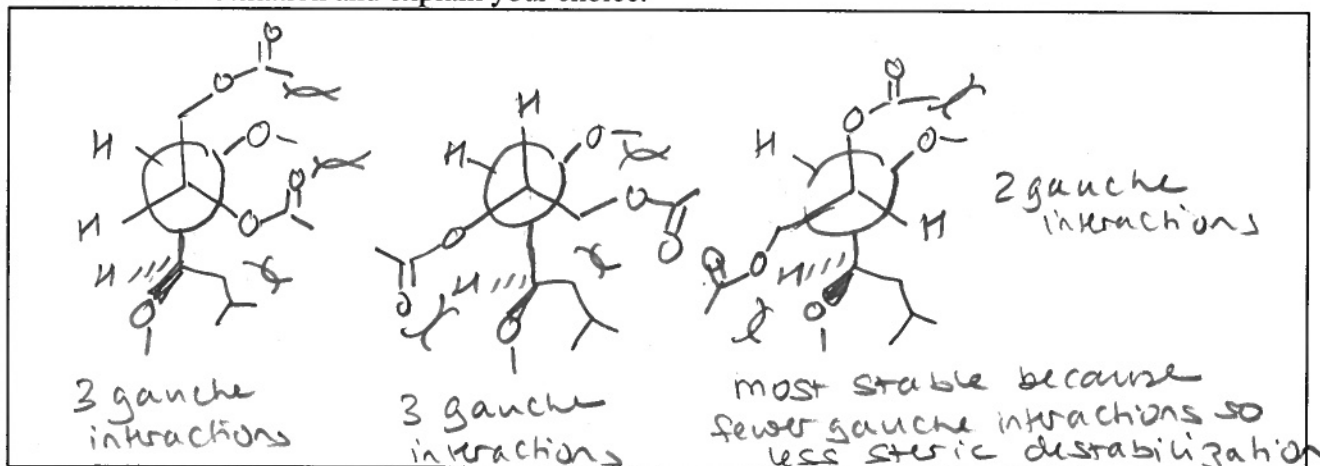
The circled N is least basic because lone pairs are involved in resonance & the protonated structure will have no resonance stabilization.



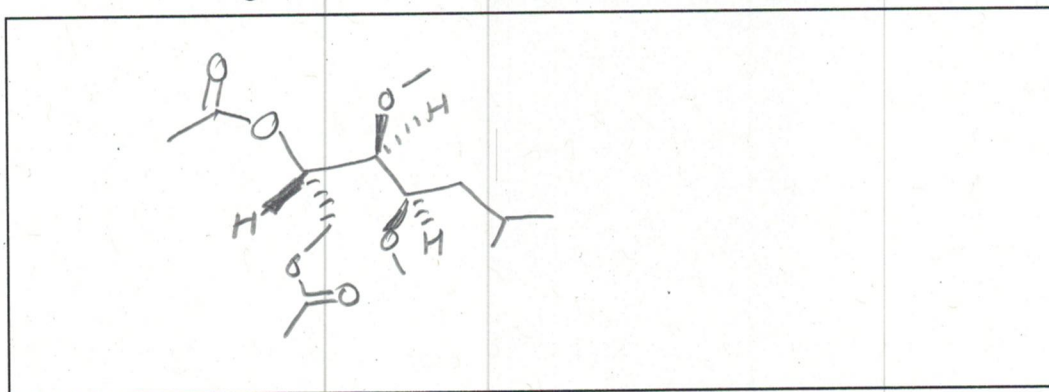
4. (11 points) Consider the molecule shown below:



a. Draw the three staggered Newman projections down the bond indicated with the arrow. Identify the most stable conformation and explain your choice.

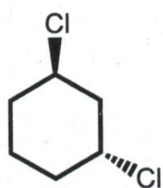


b. Draw a line drawing of the most stable conformation that you identified in part a of this question.



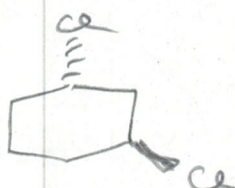
5. (12 points) For each compound, circle whether it is chiral or achiral, and draw the enantiomer and a diastereomer. If no enantiomer or diastereomer exists, then write 'none'.

a.



Chiral or Achiral

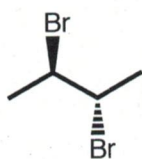
Enantiomer



Diastereomer



b.

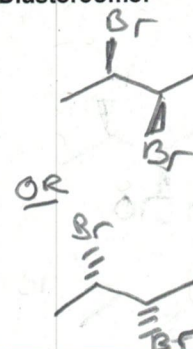


Chiral or Achiral

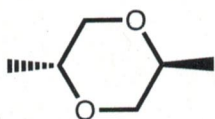
Enantiomer

none

Diastereomer



c.

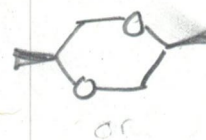


Chiral or Achiral

Enantiomer

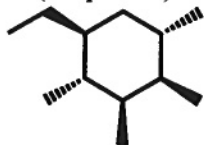
None

Diastereomer

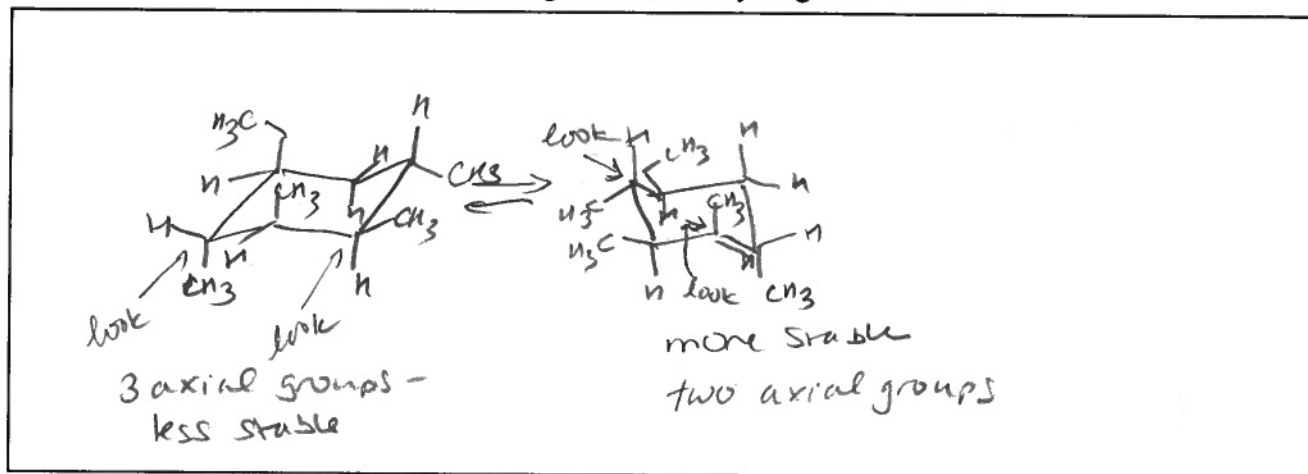




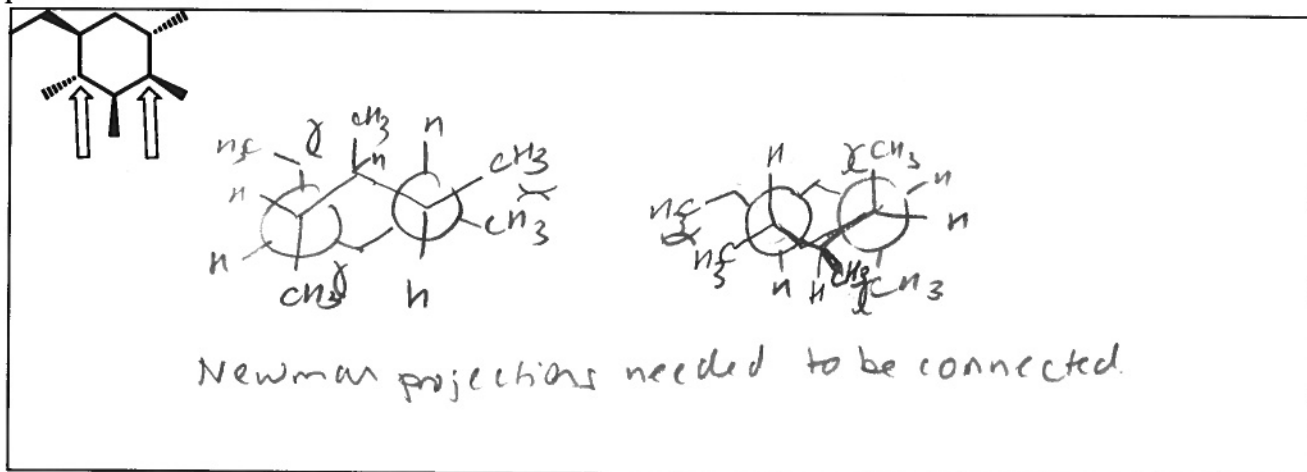
6. (22 points) Consider the molecule shown below.



a. Draw both chair conformations, drawing in all of the hydrogens.



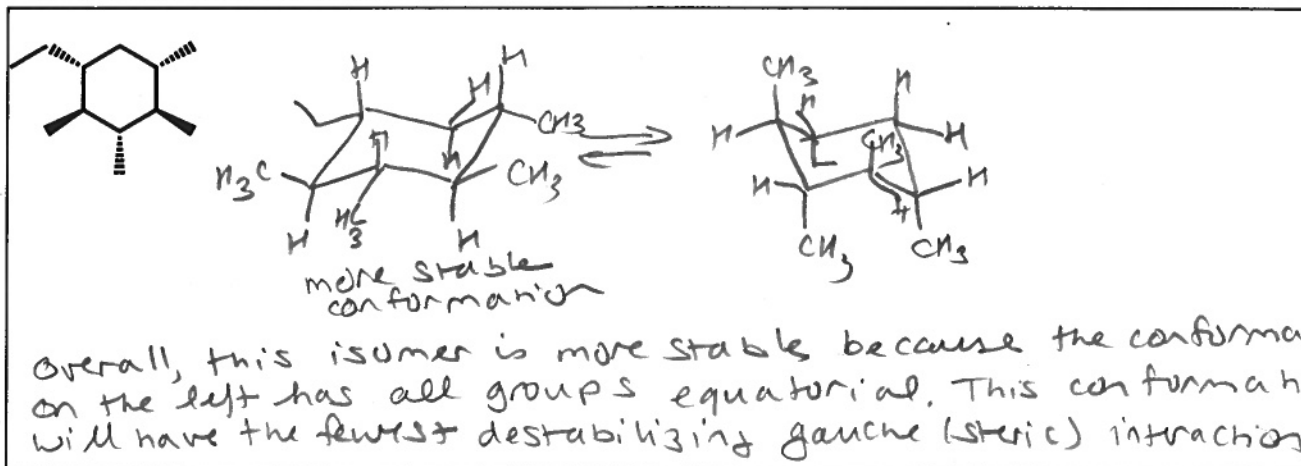
b. Draw Newman projections looking down the indicated bonds for both conformations that you drew in part a.



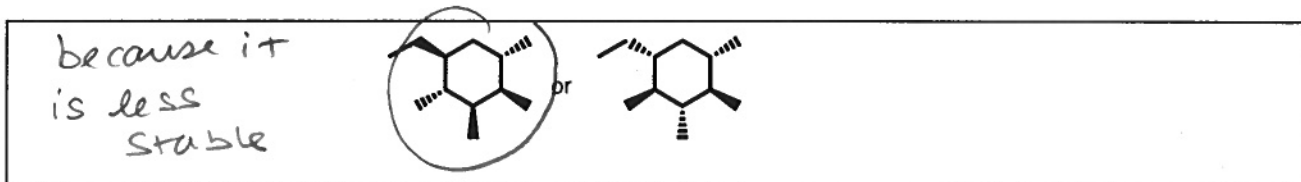
c. Use both your chair structures and Newman projections to explain which conformation is more stable.

Conformation on the right is more stable because it has fewer axial groups. These are destabilizing because of the destabilizing gauche interactions they have with the 1,3 CH<sub>2</sub> groups (1,3-diaxial interactions). Some of these gauche interactions are illustrated in the Newman projections. The 1,3 diaxial interaction between the ethyl & methyl group will be particularly destabilizing.

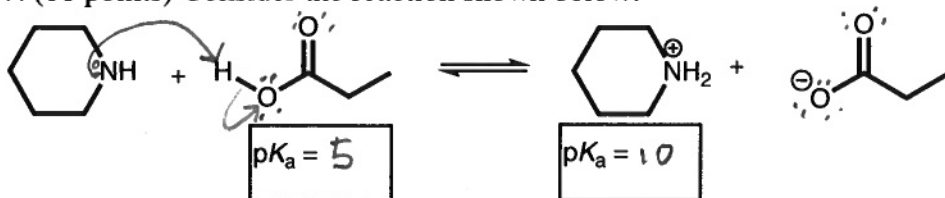
d. Will the isomer shown below be more or less stable than the isomer drawn at the beginning of this problem? Explain your answer. In your explanation, draw both chair conformations, decide which is more stable, and compare the most stable conformation to the most stable conformation of the isomer you drew in part a of this question.



e. Circle the isomer that will have a larger (more negative) heat of combustion?



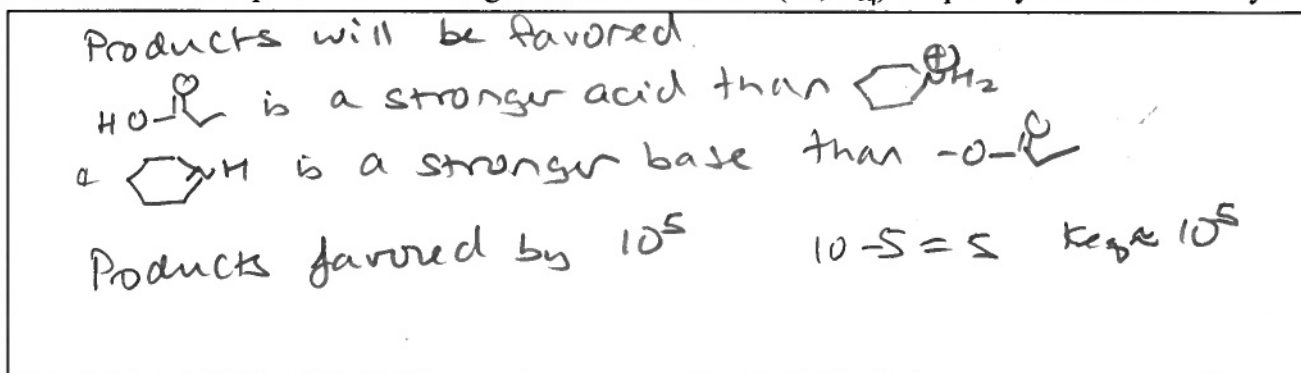
7. (11 points) Consider the reaction shown below:



a. Draw in all of the lone pairs in the starting materials and products and the arrows to go from reactants to products in this reaction.

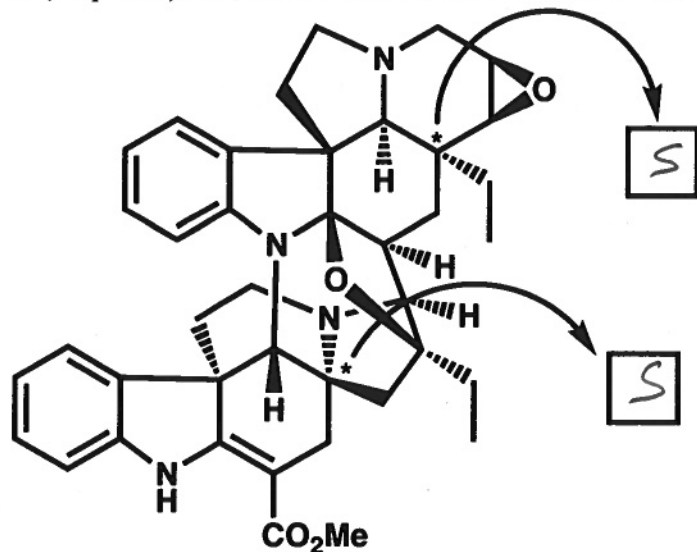
b. Fill in the approximate  $pK_a$ 's in the boxes below the reaction.

c. Will the equilibrium favor the products or the starting materials of this reaction? By approximately how much will the products or starting materials be favored (ie.,  $K_{eq}$ )? Explain your answer briefly.






8. (12 points) The molecule shown below is called Ervafoline.

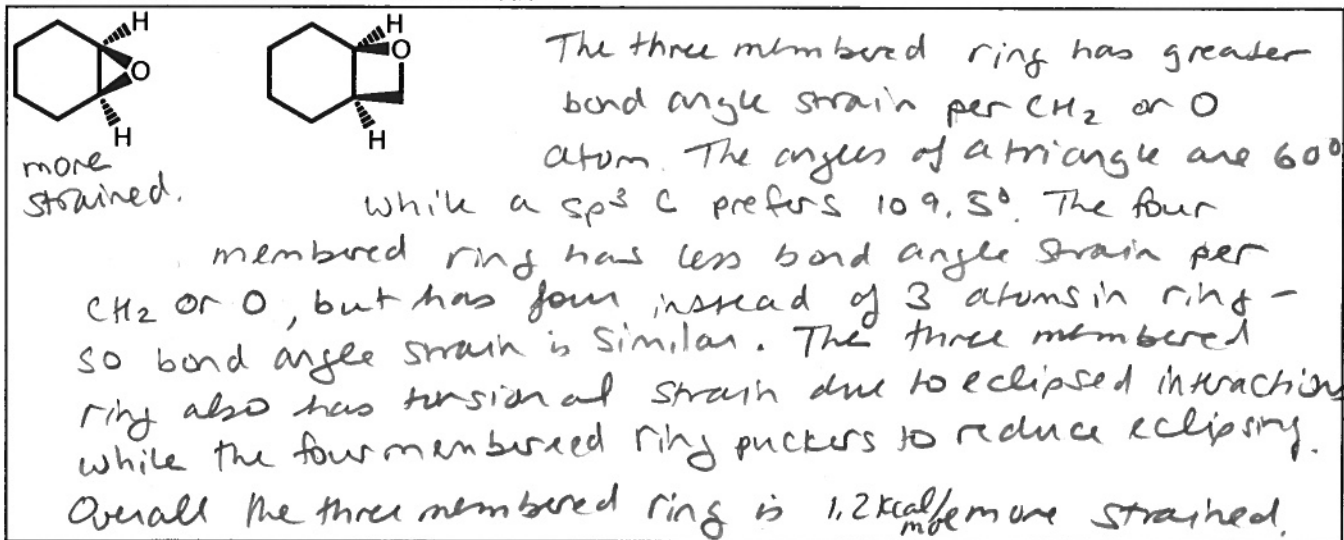


a. Assign the stereocenters marked with a \* as 'R' or 'S' in the boxes provided.

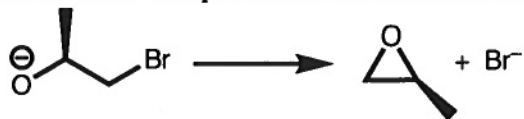
b. If the specific rotation of Ervafoline is  $-25^\circ$ , what specific rotation would you measure, if you isolated a mixture of 80% Ervafoline and 20% the enantiomer of Ervafoline? Show your work.



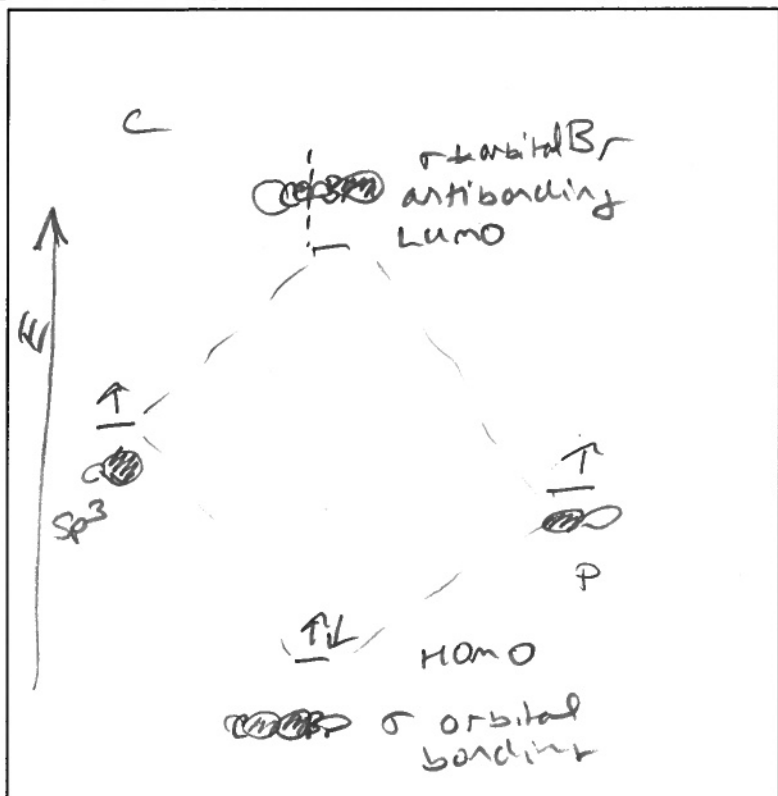
c. Ervafoline contains a strained 3-membered ring with oxygen, called an epoxide, which will be a site of reactivity in the molecule. Using the two simpler molecules drawn below, how would the ring strain change with a 4-membered ring with oxygen? Compare the sources of strain in each molecule shown below. Which molecule is more strained?




9. (14 points) The following reaction shows the formation of 3-membered rings (epoxides) by the reaction of a deprotonated alcohol with a C-Br bond in the same molecule.



a. Draw a molecular orbital diagram for the C-Br bond in the reactant. You do not need to include lone pairs in your diagram. Sketch and label all orbitals. Label the HOMO and LUMO of this bond.



b. What is the most reactive pair of electrons on the negatively charged oxygen? Draw a sketch of this orbital.



c. In this reaction, the most reactive pair of electrons on O reacts with the LUMO of the C-Br bond. Sketch that interaction on the line drawing below

