

Chemistry 1B, Spring 2015

April 13, 2015
(50 min., closed book)

Name: KEY

GSI: _____

SID: _____

Section: _____

Write your name and that of your GSI on all 10 pages of the exam. There is one additional sheet for scratch paper. Equations, constants, data and a periodic table are on this page. Please ask your GSI for additional scratch paper.

For credit:

Show your work for calculations. Round to the appropriate number of significant figures and don't forget units!

Write your answers in the boxes – anything outside of the boxes will not be graded. Please keep your responses succinct.

You may use a **non-graphing** scientific calculator. Both pen and pencil are acceptable.

DO NOT OPEN THIS EXAM UNTIL TOLD TO DO SO.

GOOD LUCK!

Section	Page	Points	Score
1. Oxidation of Iron	2-3	9	
2. PES	4-5	14	
3. Enzymes	6-7	17	
4. Clock Reaction	8-9	21	
5. Short Answer and Problem	10	9	
Total		70	

Useful Equations and Constants

$$R = 8.314 \text{ J / (mol K)}$$

$$\Delta G^\circ = -RT \ln K$$

$$k = Ae^{-E_a/RT}$$

$$^\circ\text{C} + 273.15 = \text{K}$$

$$\ln \frac{[A]_t}{[A]_0} = -kt$$

$$\ln k = \left(-\frac{E_{\text{act}}}{R}\right)\left(\frac{1}{T}\right) + \ln A$$

$$\frac{1}{[B]_t} - \frac{1}{[B]_0} = kt$$

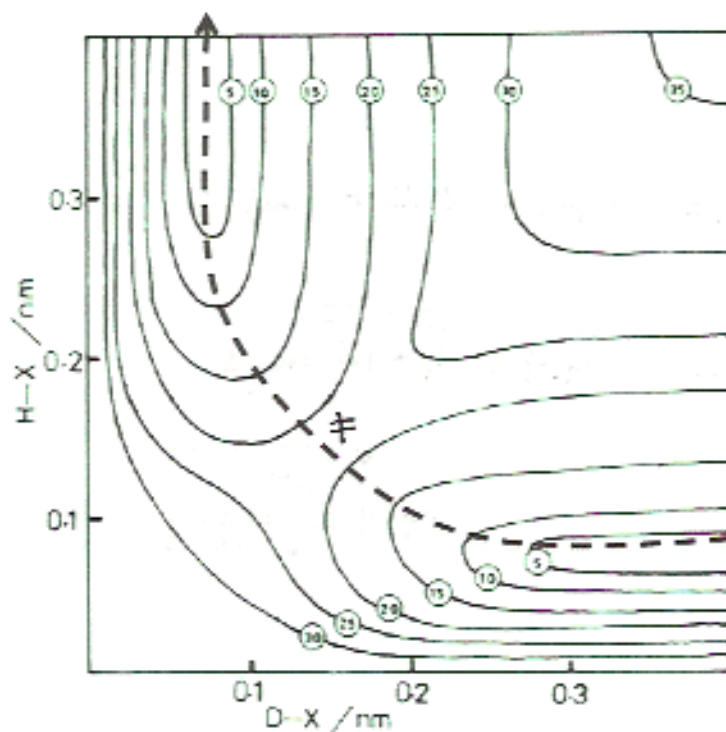
$$v_0 = \frac{V_{\text{max}}[S]}{K_M + [S]}$$

$$\frac{1}{v_0} = \frac{K_M + [S]}{V_{\text{max}}[S]}$$

$$= \frac{K_M}{V_{\text{max}}[S]} + \frac{1}{V_{\text{max}}}$$

Section 2: Potential Energy Surfaces

The potential energy surface for the reaction of $\text{HX} + \text{D} \rightarrow \text{XD} + \text{H}$ is shown below. (X is a halogen and D is deuterium, ^2H)



The energies (kJ/mol) appear as circled numbers on the contours. The reaction path is labeled with the dashed line.

- 1) a. On the diagram, label the location of the activated complex using the following symbol: \ddagger
- b. To the best of your ability, approximate the activation energy (E_a) for this reaction:

$$E_a = 20 - 25 \text{ kJ/mol}$$

$$\sim 22 \text{ kJ/mol} - 0 \text{ kJ/mol} = 22 \text{ kJ/mol}$$

Name _____

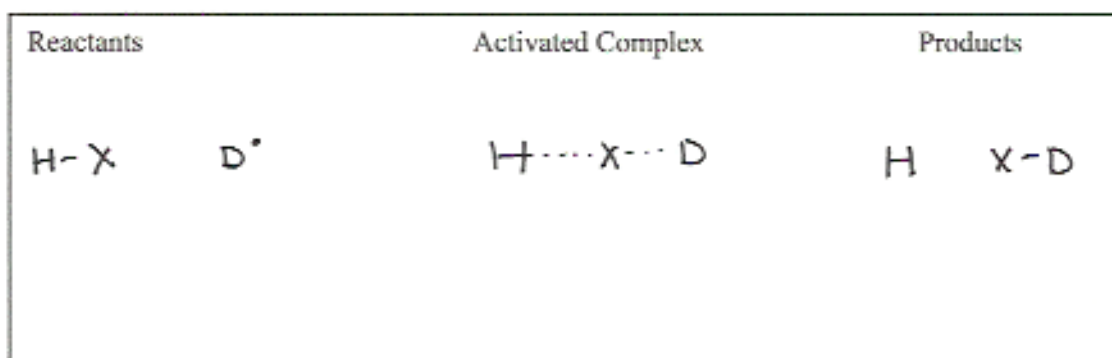
GSI _____

(Section 2, cont.)

- 2) To the best of your ability, approximate the bond length of DX to the second decimal place:

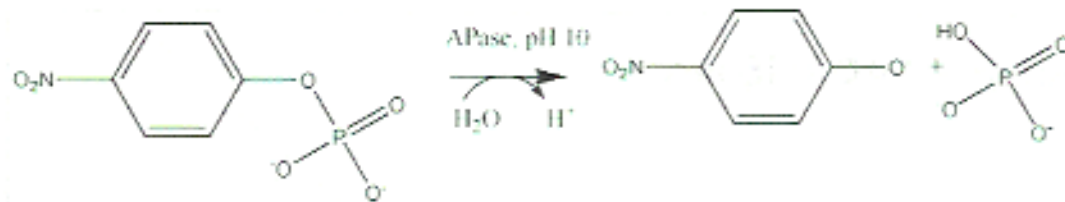
Bond length = ~0.075 nm

- 3) Draw molecular structures of D-X, H-X and the transition state below.

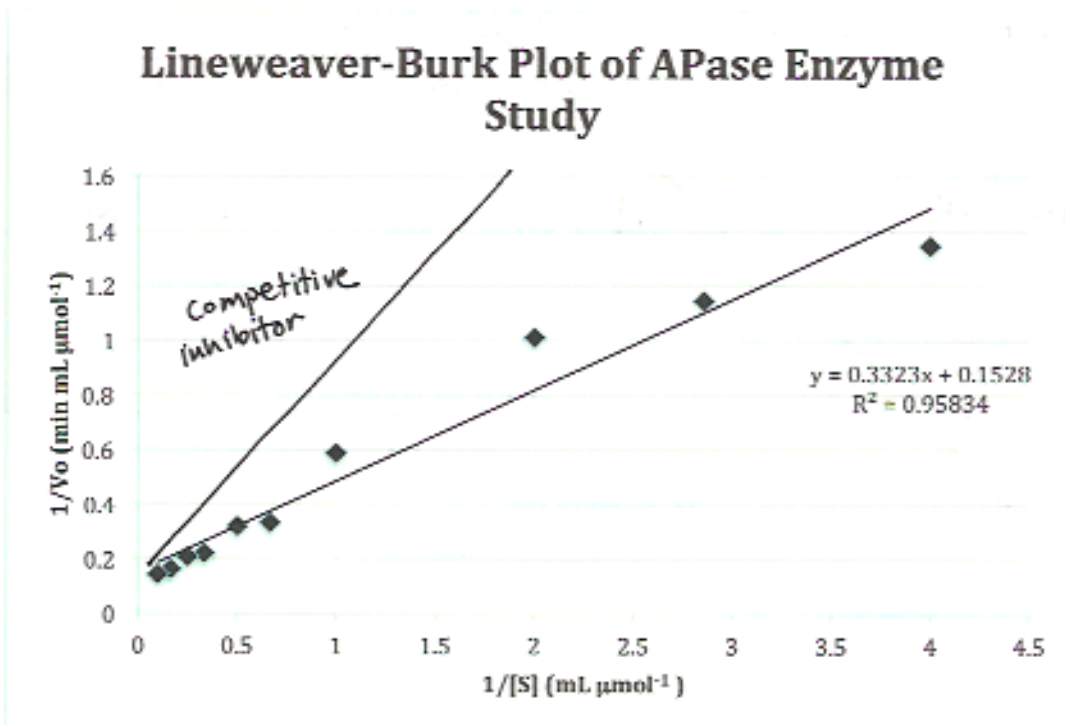


Section 3: Enzymes

Alkaline phosphatase (APase) is an enzyme for the following reaction with p-nitrophenylphosphate as the substrate:



The Lineweaver-Burk plot for this reaction is the following:



1) Calculate V_{\max} .

$$V_{\max} = 6.545 \frac{\mu\text{mol}}{\text{min} \cdot \text{mL}}$$

$$V_{\max} = \frac{1}{y\text{-int}} = \frac{1}{0.1528} \frac{\text{min} \cdot \text{mL}}{\mu\text{mol}} = 6.5445 \dots \frac{\mu\text{mol}}{\text{min} \cdot \text{mL}}$$

$$\rightarrow 6.545 \frac{\mu\text{mol}}{\text{min} \cdot \text{mL}}$$

(Section 3, cont.)

2) Calculate K_m .

$$K_m = 2.175 \text{ } \mu\text{mol/mL}$$

$$\text{slope} = \frac{K_M}{V_{MAX}}$$

$$K_M = \text{slope} \cdot V_{MAX}$$

$$K_M = 0.3323 \cdot 6.545$$

$$K_M = 2.175 \text{ } \mu\text{mol/mL}$$

3) A phosphate inhibitor is competitive.

- Sketch the expected plot for this inhibitor on the previous Lineweaver-Burk plot.
- Describe how a competitive inhibition affects V_{max} and K_m .

A competitive inhibitor blocks the substrate from binding with the enzyme. At high concentrations of S (in comparison to I), the reaction exhibits the behavior modeled by Michaelis-Menten, so V_{MAX} does not change. However, due to the presence of the I , we will need more S to reach $1/2 V_{max}$, so K_M increases.

Section 4: Clock Reaction

The following reaction was studied using the iodine clock reaction set-up:



The following data was obtained at room temperature. Except for flask #4, all experiments were conducted at 25.0°C.

Flask #	$[\text{H}_2\text{O}_2]_i$ (M)	$[\text{I}^-]_i$ (M)	Initial rate of I_2 formation (M/s)
1	0.012	0.015	1.71×10^{-6}
2	0.02	0.015	2.91×10^{-6}
3	0.02	0.006	1.16×10^{-6}
4 (1.00°C)	0.012	0.015	3.37×10^{-7}

- 1) a. Calculate the reaction orders for H_2O_2 and I^- . Round reaction orders to whole numbers. Assuming that the reaction order for H^+ is zero, write out the rate law.

$$d[\text{I}_2]/dt = k[\text{H}_2\text{O}_2]^x[\text{I}^-]^y$$

Flask 1:2

$$\frac{\text{Rate}_1}{\text{Rate}_2} = \left(\frac{[\text{H}_2\text{O}_2]_1}{[\text{H}_2\text{O}_2]_2} \right)^x$$

$$\frac{1.71 \times 10^{-6}}{2.91 \times 10^{-6}} = \left(\frac{0.012}{0.02} \right)^x$$

$$x = \frac{\ln(0.588)}{\ln(0.6)}$$

$$x = 1.04 \dots \rightarrow \textcircled{1}$$

Flask 2:3

$$\frac{\text{Rate}_2}{\text{Rate}_3} = \left(\frac{[\text{I}^-]_2}{[\text{I}^-]_3} \right)^y$$

$$\frac{2.91 \times 10^{-6}}{1.16 \times 10^{-6}} = \left(\frac{0.015}{0.006} \right)^y$$

$$y = \frac{\ln(2.51)}{\ln(2.5)} \quad y = 1.004 \dots \rightarrow \textcircled{1}$$

(Section 4, cont.)

1) b. Calculate the reaction rate constant, k , at 25.0°C

$$k = 9.5 \times 10^{-3} \frac{1}{M \cdot s} \quad (\text{number will vary if flask 2,3 data is used.})$$

$$\text{Rate}_1 = k [\text{H}_2\text{O}_2]_1 [\text{I}^-]_1$$

$$k = \frac{1.71 \times 10^{-6} \frac{M}{s}}{0.012 M \cdot 0.015 M}$$

$$k = 9.5 \times 10^{-3} \frac{1}{M \cdot s}$$

2) Calculate the activation energy (E_a , kJ/mol) for this reaction.

$$E_a = 46 \text{ kJ/mol}$$

$$\frac{k_1}{k_4} = \frac{A e^{-E_a/RT_1}}{A e^{-E_a/RT_4}}$$

$$\frac{\text{Rate}_1}{[\text{I}^-]_1 [\text{H}_2\text{O}_2]_1} = e^{-\frac{E_a}{RT_1} + \frac{E_a}{RT_4}}$$

$$\frac{\text{Rate}_1}{[\text{I}^-]_1 [\text{H}_2\text{O}_2]_1} = e^{-\frac{E_a}{RT_1} + \frac{E_a}{RT_4}}$$

$$\ln \frac{\text{Rate}_1}{\text{Rate}_4} = \frac{E_a}{R} \left(\frac{1}{T_4} - \frac{1}{T_1} \right)$$

$$\begin{aligned} T_1 &= 298.15 \text{ K} \\ T_4 &= 274.15 \text{ K} \\ E_a &= \ln \frac{\text{Rate}_1}{\text{Rate}_4} \cdot R \\ &\quad \left(\frac{1}{T_4} - \frac{1}{T_1} \right) \\ E_a &= 45988.8 \dots \text{ J/mol} \\ &\quad \downarrow \\ &46 \text{ kJ/mol} \end{aligned}$$

3) How would you expect the rate of the reaction to change as the temperature was increased? Explain your reasoning.

The rate would increase with temperature. At higher temperatures, more molecules have enough energy to overcome the activation energy. (Boltzmann's Distribution).

Section 5: Short Answer and Problem

Please keep responses within the box. You may use figures to illustrate your reasoning.

- 1) Approximate whether the steric factor (p) for the following reaction is greater than, equal to, or less than 1. (Circle one in the box.) Explain your reasoning.

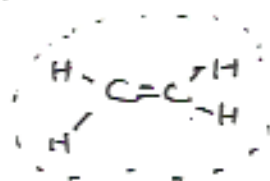


Less than 1

Equal to 1

Greater than 1

Collision theory assumes all molecules/atoms are small hard spheres. C_2H_4 is a larger, linear(-like) molecule, so its actual shape is smaller than the spherical approximation.



- 2) For the following mechanism:
- Identify the intermediate(s).
 - Derive an expression for the rate law for the overall reaction using steady-state approximation. k_2 is significantly smaller than k_1 and k_{-1} .

Intermediate(s): MoCl_5^-

$$\text{Rate} = k_2 \frac{[\text{NO}_3^-][\text{MoCl}_6^{2-}]}{[\text{Cl}^-]}$$

$$\text{Rate} = k_2 [\text{NO}_3^-] [\text{MoCl}_5^-]$$

steady state approx. for MoCl_5^-

$$\frac{d[\text{MoCl}_5^-]}{dt} = 0 = k_1 [\text{MoCl}_6^{2-}] - k_{-1} [\text{MoCl}_5^-] [\text{Cl}^-] - k_2 [\text{NO}_3^-] [\text{MoCl}_5^-]$$

$$[\text{MoCl}_5^-] = \frac{k_1 [\text{MoCl}_6^{2-}]}{k_{-1} [\text{Cl}^-]}$$

$$\text{Rate} = k_2 [\text{NO}_3^-] \cdot \frac{k_1 [\text{MoCl}_6^{2-}]}{k_{-1} [\text{Cl}^-]} = k_{\text{obs}} \frac{[\text{NO}_3^-][\text{MoCl}_6^{2-}]}{[\text{Cl}^-]}$$