

ME 106 Midterm #1 Solution

Problem 1. Note: r is a variable $r = [R_1, R_2]$, $K = R_2/R_1$ (kappa)

a) Let $r = R_2$, $u_0|_{R_2} = \frac{\omega}{K^2-1} \left[\frac{R_2^2}{R_2} - R_2 \right] = 0$

Let $r = R_1$, $u_0|_{R_1} = \frac{\omega}{K^2-1} \left[\frac{R_2^2}{R_1} - R_1 \right]$

$$= \frac{\omega}{K^2-1} [K^2 - 1] R_1$$

$$= \omega R_1$$

No-slip boundary condition is satisfied on the cylinder walls.

b) $\tau = \mu \left[r \frac{d}{dr} \left(\frac{u_0}{r} \right) \right]$

$$= \mu r \frac{d}{dr} \left(\frac{\omega}{K^2-1} \left(\frac{R_2^2}{r^2} - 1 \right) \right)$$

$$= \mu \frac{\omega r}{K^2-1} \frac{d}{dr} \left(\frac{R_2^2}{r^2} - 1 \right)$$

$$= \mu \frac{\omega r R_2^2}{K^2-1} \left(-\frac{2}{r^3} \right)$$

$$= \frac{2\mu\omega R_2^2}{(1-K^2)r^2}$$

⑩ On inner wall, $r = R_1$,

$$\tau_{1,1} = \frac{2\mu\omega R_2^2}{(1-K^2)R_1^2} = 2\mu\omega \frac{K^2}{1-K^2}$$

⑪ On outer wall, $r = R_2$,

$$\tau_{2,2} = -\frac{2\mu\omega R_2^2}{(1-K^2)R_2^2} = -2\mu\omega \frac{1}{1-K^2}$$

1 pt for opposite sign

$$(c) \quad \frac{\tau_2}{\tau_1} = \frac{-2\mu\omega \frac{1}{1-k^2}}{2\mu\omega \frac{k^2}{1-k^2}} = -\frac{1}{k^2} = -\frac{R_1^2}{R_2^2} \quad \boxed{\tau_1 > -\tau_2}$$

(4)

Total torque on fluid per unit length into the paper.

$$\Sigma M = M_1 + M_2$$

$$= (2\pi R_1 \tau_1) \cdot R_1 + (2\pi R_2 \tau_2) R_2$$

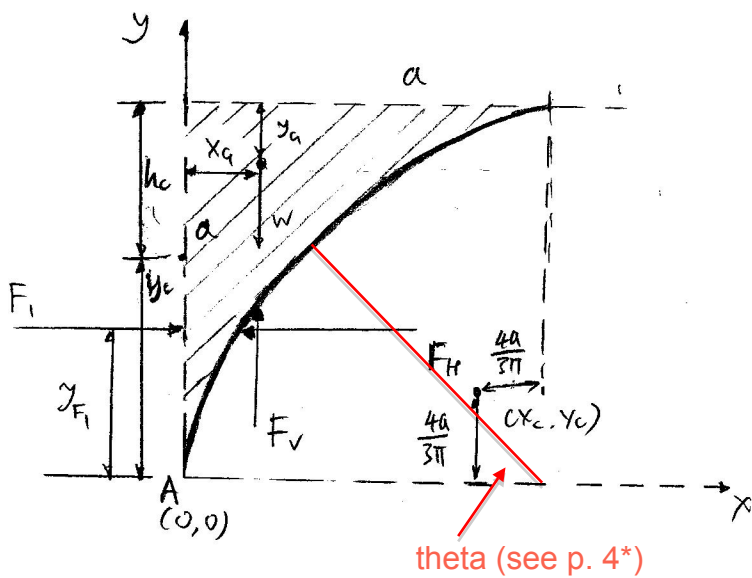
$$= 4\pi\mu\omega R_1^2 \frac{k^2}{1-k^2} - 4\pi\mu\omega R_2^2 \frac{1}{1-k^2}$$

$$= \frac{4\pi\mu\omega}{1-k^2} (R_1^2 k^2 - R_2^2)$$

(2)

$$= 0$$

Problem 2



* P_o on the top surface and curved surface cancels.

* Consider force and moment balance on the shaded volume of fluid.

* All forces are per unit distance into the paper.

* Origin at A.

$$\gamma = \rho w g$$

ca) $F_H = F_V$ on vertical surfaces. F_H and F_V collinear.
 For the vertical surface, $h_c = \frac{a}{2}$, $A = a$ (per unit distance into paper)

$$(10) \quad F_V = \gamma h_c A = \gamma \frac{a}{2} \cdot a = \frac{1}{2} \gamma a^2$$

Line of action of F_V is along $y = y_{F_V}$.
 $y_c = \frac{a}{2}$ and y_{F_V} is below y_c by $\frac{I_{zc}}{h_c A}$

z-axis pointing out of paper.

$$(10) \quad y_{F_V} = y_c - \frac{I_{zc}}{h_c A} = \frac{a}{2} - \frac{\frac{1}{12} a^3}{\frac{1}{2} a \cdot a} = \frac{1}{3} a$$

F_x and F_H has the same magnitude and line of action but opposite direction.

$F_x = \frac{1}{2} \gamma a^2 = \frac{1}{2} \rho w g a^2$ in the positive x-direction with line of action along $y = \frac{1}{3} a$.

$$cb) \quad w = \gamma \left(a^2 - \frac{\pi a^2}{4} \right) = \gamma a^2 \left(1 - \frac{\pi}{4} \right) \quad (10)$$

The centroid of the quarter circle is located at

$$x_c = a - \frac{4a}{3\pi} \quad y_c = \frac{4a}{3\pi}$$

To get x_a , consider area moment about y-axis,

$$x_a \cdot \left(a^2 - \frac{\pi a^2}{4} \right) + x_c \cdot \left(\frac{\pi a^2}{4} \right) = \frac{a}{2} \cdot a^2 \quad \text{area of square}$$

centroid of square.

$$X_a = \frac{\frac{1}{2} a^3 - \left(a - \frac{4a}{3\pi}\right) \frac{\pi a^2}{4}}{a^2 - \frac{\pi a^2}{4}}$$

$$\textcircled{10} \quad = \frac{\frac{1}{2} - \frac{\pi}{4} + \frac{1}{3}}{1 - \frac{\pi}{4}} a = \frac{\frac{5}{6} - \frac{\pi}{4}}{1 - \frac{\pi}{4}} a$$

$$= \frac{10 - 3\pi}{12 - 3\pi} a \cong 0.22a$$

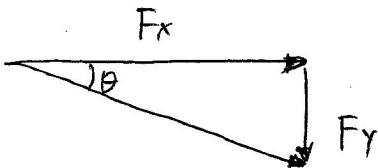
$F_v = W$ and F_v and W are colinear.

F_y and F_v have the same magnitude and line of action but opposite direction.

$F_y = \gamma a^2 \left(1 - \frac{\pi}{4}\right)$, in the negative y -direction along

$$X = X_a = \frac{10 - 3\pi}{12 - 3\pi} a \cong 0.22a$$

(c)



$$\tan \theta = \frac{F_y}{F_x} = \frac{\gamma a^2 \left(1 - \frac{\pi}{4}\right)}{\frac{1}{2} \gamma a^2} = 2 - \frac{\pi}{2}$$

$$\theta = \arctan \left(2 - \frac{\pi}{2}\right) \cong 23^\circ \quad \textcircled{6}$$

Approach using direct integration, that yields identical results, but

Problem 2 requires abilities to set up integrals and complete integration

Hydrostatic pressure: $p = \rho gh = \gamma(a - a \sin \theta) = \gamma a(1 - \sin \theta)$

Normal vector of quarter-circle surface: $\mathbf{n} = (n_x, n_y) = (\cos \theta, -\sin \theta)$

(a) Horizontal force on quarter-circle surface:

$$F_x = \int_A p n_x dA = \int_0^{\pi/2} \gamma a^2 (1 - \sin \theta) \cos \theta d\theta = \gamma a^2 \int_0^{\pi/2} (\cos \theta - \sin \theta \cos \theta) d\theta = \gamma a^2 \left[\sin \theta - \frac{1}{2} \sin^2 \theta \right]_0^{\pi/2}$$

$$= \frac{1}{2} \gamma a^2$$

Moment of F_x about A (negative sign means clockwise direction)

$$M_x = - \int_A y p n_x dA = - \int_0^{\pi/2} \gamma a^3 (1 - \sin \theta) \cos \theta \sin \theta d\theta = - \gamma a^3 \int_0^{\pi/2} (\cos \theta \sin \theta - \cos \theta \sin^2 \theta) d\theta$$

$$= - \gamma a^3 \left[\frac{1}{2} \sin^2 \theta - \frac{1}{3} \sin^3 \theta \right]_0^{\pi/2} = - \frac{1}{6} \gamma a^3$$

Line of action of F_x is along $y = -M_x / F_x = \frac{1}{6} \gamma a^3 / \frac{1}{2} \gamma a^2 = \frac{1}{3} a$

(b) Vertical force on quarter-circle surface:

$$F_y = \int_A p n_y dA = - \int_0^{\pi/2} \gamma a^2 (1 - \sin \theta) \sin \theta d\theta = - \gamma a^2 \int_0^{\pi/2} \left(\sin \theta - \frac{1 - \cos 2\theta}{2} \right) d\theta$$

$$= - \gamma a^2 \left[-\cos \theta - \frac{1}{2} \theta + \frac{1}{4} \sin 2\theta \right]_0^{\pi/2} = - \gamma a^2 \left(1 - \frac{\pi}{4} \right)$$

Moment of F_y about A

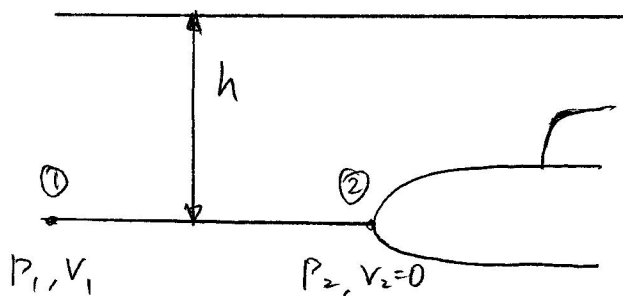
$$M_y = - \int_A x p n_y dA = - \int_0^{\pi/2} \gamma a^3 (1 - \cos \theta) (1 - \sin \theta) \sin \theta d\theta$$

$$= - \gamma a^3 \int_0^{\pi/2} (\sin \theta - \sin^2 \theta - \sin \theta \cos \theta + \sin^2 \theta \cos \theta) d\theta$$

$$= - \gamma a^3 \left[-\cos \theta - \frac{1}{2} \theta + \frac{1}{4} \sin 2\theta - \frac{1}{2} \sin^2 \theta + \frac{1}{3} \sin^3 \theta \right]_0^{\pi/2} = - \gamma a^3 \left(\frac{5}{6} - \frac{\pi}{4} \right)$$

Line of action of F_y is along $x = -M_y / F_y = \gamma a^3 \left(\frac{5}{6} - \frac{\pi}{4} \right) / \gamma a^2 \left(1 - \frac{\pi}{4} \right) = \frac{\frac{5}{6} - \frac{\pi}{4}}{1 - \frac{\pi}{4}} a = \frac{10 - 3\pi}{12 - 3\pi} a$

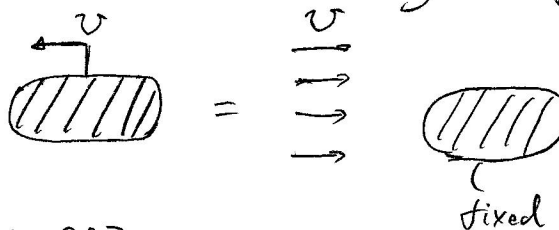
Problem 3



(a) Assume no waves.

Point ① far upstream of the submarine

Point ② at the stagnation point.



$$P_1 + \frac{1}{2} \rho V_1^2 + \rho g z_1 = P_2 + \frac{1}{2} \rho V_2^2 + \rho g z_2$$

$$V_2 = 0, \quad z_1 = z_2, \quad V_1 = U$$

Stagnation pressure $P_2 - P_1 = \underline{\underline{\frac{1}{2} \rho U^2}}$ (15)

* Alternatively, it is also ok to give the total pressure at ②

$$P_2 = P_1 + \frac{1}{2} \rho U^2 = \rho g h + \frac{1}{2} \rho U^2$$

(b) $h = 10 \text{ m}, \quad U = 20 \text{ knots} = 10.29 \text{ m/s}$

$\rho_{\text{sw}} = 1027 \text{ kg/m}^3$ ($\pm 3 \text{ kg/m}^3$ ok)

Stagnation pressure $P_2 - P_1 = 54.4 \text{ kPa}$. (10)

It is also ok to give the total pressure

$$P_2 = 155.1 \text{ kPa}$$