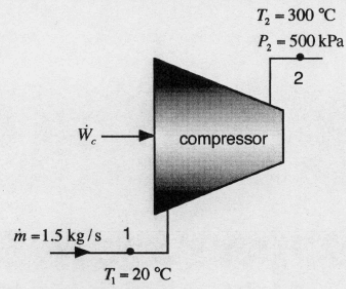


## Midterm II




1. Air flows at a steady rate of 1.5 kg/s through a compressor. The inlet temperature at 1 is 20 °C. At the exit location 2, the temperature is 300 °C and the pressure is 500 kPa. The pressure at 1 is unknown, due to an instrumentation failure. The compressor operates adiabatically and has an efficiency of 0.8. In analyzing this system, treat air as an ideal gas with constant specific heats:  $c_p = 1.005 \text{ kJ/kgK}$ ,  $c_v = 0.780 \text{ kJ/kgK}$ .

- What is the input power to the compressor?
- What would the temperature at 2 be if the compressor were reversible and adiabatic?
- What is the inlet pressure at 1?

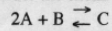
2. The corresponding standard free energy change is indicated to the right of the two reactions below

glucose 6-phosphate  $\rightarrow$  fructose 6-phosphate  $\Delta G'^\circ = 1.7 \text{ kJ/mol}$   
glucose 6-phosphate  $\rightarrow$  glucose 1-phosphate  $\Delta G'^\circ = 7.3 \text{ kJ/mol}$

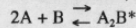
Use this information to calculate the equilibrium constant  $K'_{eq}$  for the reaction



3. Consider the chemical reaction



which occurs at biochemical standard conditions. The change in free energy for the reaction is  $\Delta G^{\circ} = -20.2$  kJ/mol. In this reaction, the reactants form the activated complex  $A_2B^*$  at the transition state.

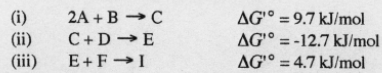


When the reactants form the transition state complex, the entropy decreases by 0.033 kJ/(mol K) and the enthalpy increases by 15.3 kJ/mol.

(a) Determine the free energy change associated with the formation of the transition state. Draw the free energy vs. reaction coordinate diagram for this reaction and indicate the changes in free energy associated with formation of the transition state and the products.

(b) Assuming that the Arrhenius model for the rate constant applies, determine the factor by which the reaction rate will increase if the concentration of A triples and the temperature is increased by 30 °C.

4. Consider the chemical reactions below that occur in a system at biochemical standard conditions (note the indicated standard free energy change for each):



(a) Only species A, B and D are initially present in the system. Will species E be produced in significant amounts? Justify your answer quantitatively.

(b) Only species A, B, D and F are initially present in the system. Will species I be produced in significant amounts? Justify your answer quantitatively.

(c) Initially the system contains only species A, B, D and F and an enzyme that reduces the activation energy of reaction (iii) by 5.2 kJ/mol. Will species I be produced in significant amounts? Justify your answer.

**Note:** Justification for answers must be indicated to receive full credit.