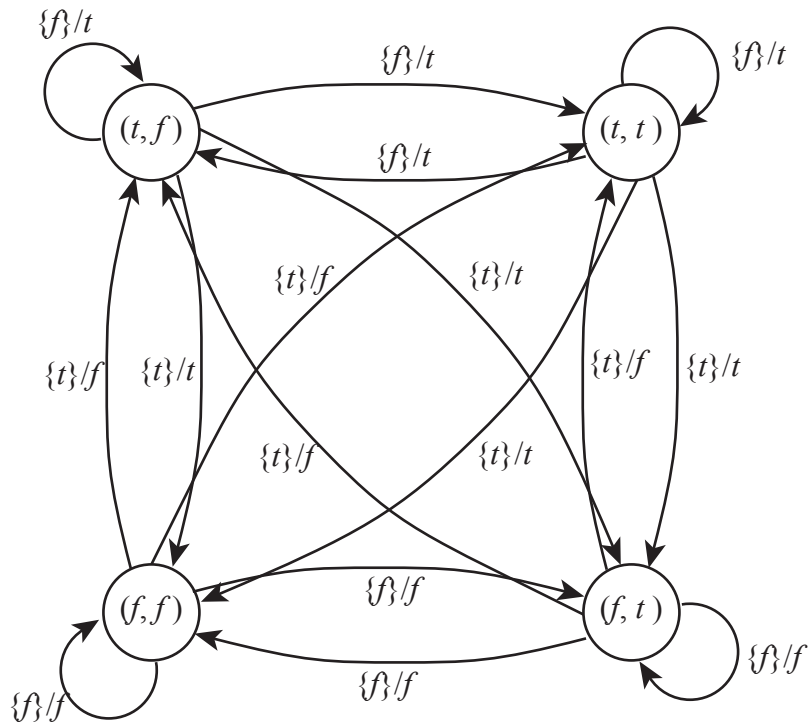


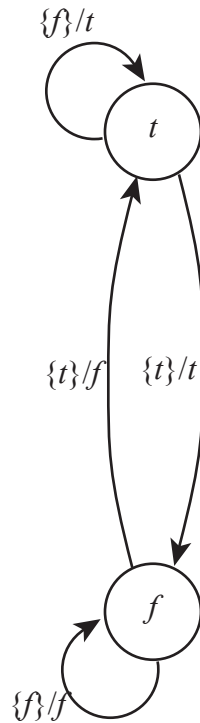
**EECS 20. Final Exam Solutions**  
**December 19, 2002.**

1. (a) d
- (b) a
- (c) none
- (d) c
- (e) e
- (f) b

2. (a) The solution is:



- (b)  $(f, f, f, t, f, f, \dots)$ .
- (c) The solution is:



The bisimilarity relation is

$$\{((t, f), t), ((t, t), t), ((f, t), f), ((f, f), f)\}.$$

3. (a) false  
 (b) true  
 (c) true  
 (d) false  
 (e) true  
 (f) true  
 (g) true
4. (a)  $p = 8$  and  $\omega_0 = \pi/4$  radians/sample.  
 (b)  $K = 4$ ,  $A_0 = A_1 = A_2 = 1$ ,  $A_3 = A_4 = 0$ ,  $\phi_1 = 0$ ,  $\phi_2 = -\pi/2$ , and the values of  $\phi_3$  and  $\phi_4$  do not matter.  
 (c)  $X_0 = 1$ ,  $X_1 = 1/2$ ,  $X_2 = 1/2i = -i/2$ ,  $X_3 = X_4 = X_5 = 0$ ,  $X_6 = -1/2i = i/2$ , and  $X_7 = 1/2$ .  
 (d) The output is

$$y(n) = 1 + \sin(\pi n/4) - \cos(\pi n/2).$$

- (e) The frequency response of the composite is

$$\forall \omega \in \text{Reals}, \quad H'(\omega) = 1 + iH(\omega),$$

by linearity, or

$$H'(\omega) = \begin{cases} 2 & \text{if } 0 < \omega < \pi \\ 1 & \text{if } \omega = 0 \text{ or } \omega = \pi \\ 0 & \text{if } -\pi < \omega < 0 \end{cases}$$

For other values of  $\omega$ , the value of  $H'(\omega)$  is determined by the fact that it is periodic with period  $2\pi$ .

(f) The output is

$$y(n) = 1 + e^{i\pi n/4} - ie^{i\pi n/2}$$

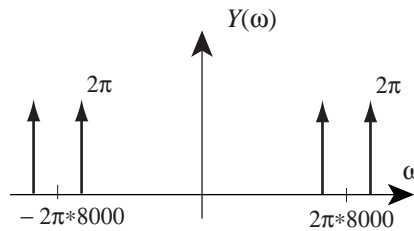
or equivalently

$$y(n) = 1 + e^{i\pi n/4} + e^{i(\pi n/2 - \pi/2)}.$$

5. (a) The CTFT is, by linearity,

$$\forall \omega \in \text{Reals}, \quad Y(\omega) = 2\pi(\delta(\omega - (\omega_c + \omega_x)) + \delta(\omega + (\omega_c + \omega_x)) + \delta(\omega - (\omega_c - \omega_x)) + \delta(\omega + (\omega_c - \omega_x)))$$

The sketch is:



(b) For all  $t \in \text{Reals}$ ,

$$u(t) = e^{i(\omega_c + \omega_x)t} + e^{i(\omega_c - \omega_x)t}.$$

(c) For all  $n \in \text{Integers}$ ,

$$u'(n) = u(nT) = 2 \cos(2\pi 400n/8000) = 2 \cos(\pi n/10).$$

(d) For all  $t \in \text{Reals}$ ,

$$z(t) = 2 \cos(2\pi 400t).$$