


Version D

Name: _____

TA: _____

SID: _____

Section: _____



Test-taking strategy: PLEASE READ THIS FIRST!

Write your name and that of your TA on all 10 pages. This test consists of two parts: multiple choice (**answers to be circled and entered on the Scantron™ sheet**) and short answer. In order to maximize your score on the exam:

- Do the questions you know how to do first.
- Then, go back and spend more time on the questions you find more challenging.
- Budget your time carefully -- don't spend too much time on one problem.
- Show all work for which you want credit and don't forget to include units.

Potentially Useful Information:

$$E = h\nu, \lambda\nu = c$$

$$\lambda_{\text{deBroglie}} = h / p = h / mv$$

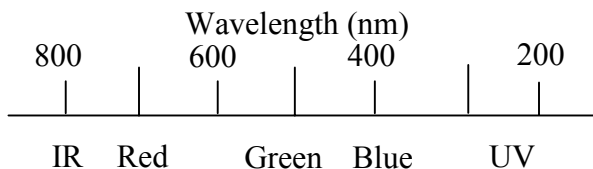
$$E_{\text{kin}}(e^-) = h\nu - \Phi = h\nu - h\nu_0$$

$$h = 6.626 \times 10^{-34} \text{ J s}$$

$$c = 3.0 \times 10^8 \text{ m}\cdot\text{s}^{-1}$$

$$1 \text{ nm} = 10^{-9} \text{ m}$$

Color and Wavelength of Light



Page	Points
Multiple Choice	
7	
8	
9	
10	
Total:	

Name: _____

TA: _____

page 2 of 10

Part I Multiple Choice (4 pts each, 72 pts total) Bubble in the correct answer on your Scantron™ form AND circle your answer on the exam. There is only one correct answer for each question, so you should circle and fill in one and only one answer for each question. There is no penalty for an incorrect response.

1.) The answer to question 1 is **D**. Bubble in **D** on your Scantron™ form

A) A B) B C) C D) D E) E

2.) Which of the following is an element?

A) air B) water C) uranium D) wine E) hydroxide

3.) When 686.0 g of the lead oxide Pb_3O_4 is heated, decomposition occurs producing 16.0 g of O_2 gas and 670.0 g of a different lead oxide. What is the empirical formula of this second oxide?

A) PbO B) Pb_2O C) PbO_2 D) Pb_2O_3 E) $\text{Pb}_{1.5}\text{O}$

4.) Which of the following molecules has an electric dipole moment?

A) CH_4 B) BF_3 C) XeF_2 D) ClF_3 E) CO_2

5.) How many structural isomers exist for the chlorinated hydrocarbon chlorobutane, C_4H_9Cl ?

A) 2

B) 4

C) 6

D) 8

E) 10

6.) Which of the following is a valid Lewis Dot Structure for hydrazine, N_2H_2 ?

A) $H = N = N = H$

B) $H - \overset{\cdot\cdot}{\underset{\cdot\cdot}{N}} - \overset{\cdot\cdot}{\underset{\cdot\cdot}{N}} - H$

C) $H - \overset{\cdot}{N} = \overset{\cdot}{N} - H$

D) $H - N \equiv N - H$

E) $H - \overset{\cdot\cdot}{N} = \overset{\cdot\cdot}{N} - H$

7.) Which of the following molecules or ions is NOT linear?

A) ICl_2^-

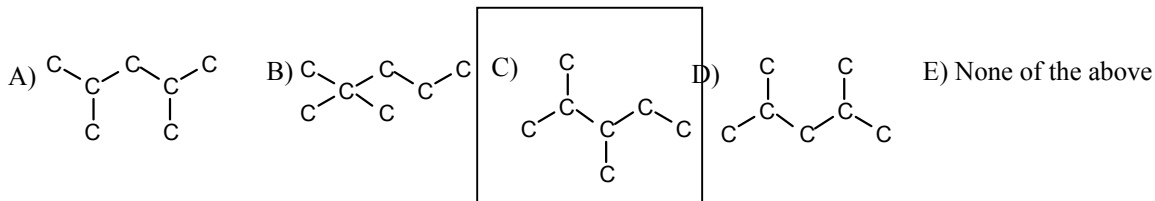
B) CO_2

C) SO_2

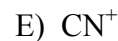
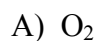
D) C_2H_2

E) HCN

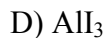
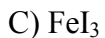
8.) Which of the following isomers of the hydrocarbon heptane, C_7H_{16} , is chiral (the hydrogen atoms are omitted from the structures)?



9.) Which of the following molecules or ions is isoelectronic with CN^- ?



10.) Which compound has the highest percentage of iodine by mass?



11.) Cupric sulfate solution is blue. Through a blue colored lens, what color will a cupric sulfate solution appear?

A) white

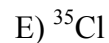
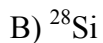
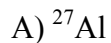
B) black

C) blue

D) red

E) green

12.) Which atom has the greatest number of neutrons?



13.) One mole of carbon atoms reacts to form C_{60} , buckminsterfullerene molecules. How many molecules of C_{60} are formed?

A) 0

B) 1

C) 1.0×10^{22}

D) 6.0×10^{23}

E) 3.6×10^{25}

14.) Atoms of ^{32}S traveling at 2.00×10^3 m/s have a deBroglie wavelength of 6.23×10^{-12} m. Which atoms, traveling at 2.00×10^3 m/s have a deBroglie wavelength of 1.24×10^{-11} m?

A) ^{16}O

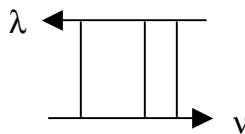
B) ^{64}Cu

C) ^{12}C

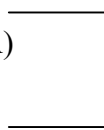
D) ^8Li

E) ^{48}Ti

15.) Which energy level diagram corresponds to the observed spectrum shown?



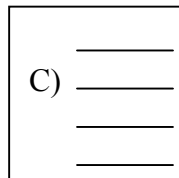
A)



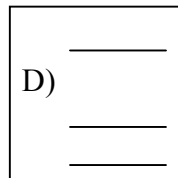
B)



C)

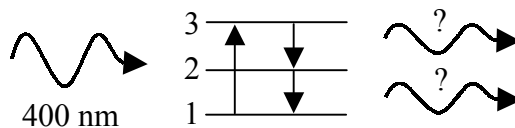


D)



E) none of the above

16.) A photon of blue light (400 nm) is absorbed and 2 photons are emitted as illustrated in the energy diagram below. To which color light do the two equivalent emitted photons correspond?



A) IR

B) Red

C) Green

D) Blue

E) UV

17.) In which of the molecules or ions below does nitrogen (N) have the highest oxidation state?

A) CN^-

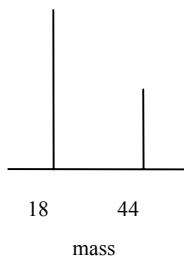
B) NO_2

C) NO_3^-

D) NH_3

E) N_2

18.) The combustion products of a hydrocarbon with which empirical formula yield the following mass spectrum?



A) C_4H

B) C_2H

C) CH

D) CH_2

E) CH_4

Name: _____

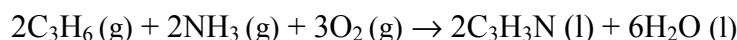
TA: _____

page 7 of 10

Part 2: Short Answer Problems (78 pts total)

Instructions: Enter answers in the boxes where provided. Show all work for which you wish to receive credit. Where explanations are required, only the first fifteen words will be considered for your grade.

- 1.) (39pts) Acrylonitrile is an important building block for synthetic fiber. It can be made by the reaction of propane with ammonia and oxygen, as follows:



- a) (11 pts) What mass of Acrylonitrile is formed by the reaction of 1.0 mole of propane and 2.0 moles of ammonia (NH_3) in the presence of excess oxygen.

Propane (C_3H_6) is the limiting reagent.

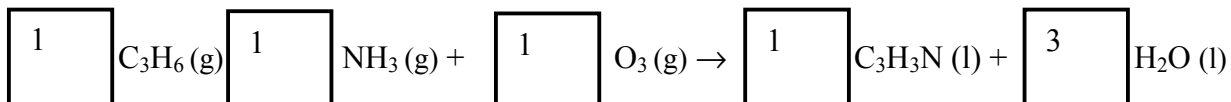
$$(1 \text{ mol C}_3\text{H}_6) (2 \text{ mol C}_3\text{H}_3\text{N}) / (2 \text{ mol C}_3\text{H}_6) = 1 \text{ mol C}_3\text{H}_3\text{N}$$

$$\text{MW}(\text{C}_3\text{H}_3\text{N}) = 53 \text{ g/mol}$$

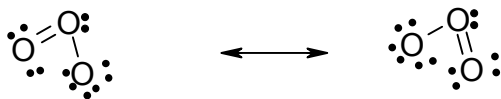
Mass Acrylonitrile:

53 g

- b) (6 pts) Acrylonitrile can be formed in the presence of ozone, O_3 , rather than molecular oxygen, O_2 . Balance the chemical equation for this reaction.



c) (11 pts) Draw a valid resonance pair of Lewis Dot Structures for Ozone.



d) (11 pts) What is the bond order of the oxygen-oxygen bond in i) oxygen (O_2) and ii) Ozone (O_3). Explain your answer.

i) oxygen (O_2)

Bond order
2

Explanation:

To obtain octets, on both "O" atoms, a double bond is needed (no resonance possible).

ii) ozone (O_3)

Bond order
1.5

Explanation:

Bond order = (total # bonds between the O atoms) /
(# resonance structures)

2.) (39 pts) Sodium metal, Na has a work function equal to 4.3×10^{-19} joules.

Name: _____

TA: _____

page 9 of 10

- a) (10 pts) Calculate the lowest frequency and the corresponding wavelength of light sufficient to eject a photoelectron from sodium metal?

$$E_{\text{kin}} = h\nu - \Phi$$
$$0 = h\nu - 4.3 \times 10^{-19}$$
$$\nu = 6.5 \times 10^{14} \text{ Hz}$$
$$c = \lambda\nu$$
$$(3 \times 10^8 \text{ m/s}) / 6.5 \times 10^{14} \text{ Hz} = 460 \text{ nm}$$

Frequency
 $6.5 \times 10^{14} \text{ Hz}$

Wavelength
460 nm

- b) (8 pts) Will red light eject an electron from sodium metal? Circle your answer and explain.

Circle one: YES

NO

DEPENDS

Explanation:

The frequency of red light is too low to overcome the work function

- c) (10 pts) How many photoelectrons are ejected from sodium metal by light of wavelength $\lambda = 400 \text{ nm}$ ($1 \text{ nm} = 10^{-9} \text{ m}$) that delivers a total energy of $2.23 \times 10^{-18} \text{ J}$?

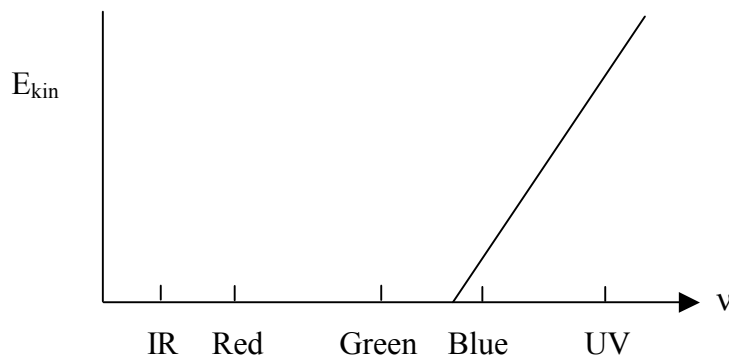
$$E_{\text{photon}} = hc/\lambda$$
$$E_{\text{photon}} = 4.97 \times 10^{-19} \text{ J}$$
$$E_{\text{total}} = n \times 4.97 \times 10^{-19} \text{ J}$$

$n =$ number of photons

$$2.23 \times 10^{-18} \text{ J} / 4.97 \times 10^{-19} \text{ J} = 4.49$$

of photoelectrons

- d) (11 pts) On the graph below, plot the kinetic energy of electrons ejected from sodium metal as a function of light frequency and explain.



Explanation:

Linear relationship of photoelectric effect and the work function is in the blue